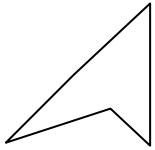




Determine which letter BEST represents the shapes that were used to create the figure shown.

**Answers**

1)



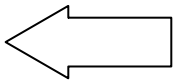
- A. heptagon & hexagon
- B. triangle & hexagon
- C. triangle & triangle
- D. rectangle & heptagon

2)



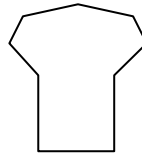
- A. heptagon & triangle
- B. quadrilateral & triangle
- C. square & hexagon
- D. heptagon & pentagon

3)



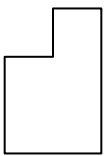
- A. square & heptagon
- B. triangle & rectangle
- C. hexagon & square
- D. quadrilateral & octagon

4)



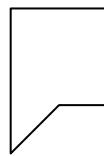
- A. heptagon & pentagon
- B. triangle & hexagon
- C. rectangle & octagon
- D. rectangle & heptagon

5)



- A. square & triangle
- B. octagon & hexagon
- C. square & square
- D. triangle & quadrilateral

6)



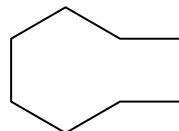
- A. square & triangle
- B. octagon & rectangle
- C. octagon & hexagon
- D. heptagon & triangle

7)



- A. pentagon & rectangle
- B. octagon & heptagon
- C. pentagon & quadrilateral
- D. rectangle & triangle

8)



- A. triangle & hexagon
- B. square & octagon
- C. rectangle & quadrilateral
- D. quadrilateral & hexagon

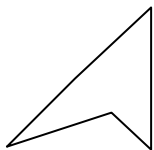
- 1. \_\_\_\_\_
- 2. \_\_\_\_\_
- 3. \_\_\_\_\_
- 4. \_\_\_\_\_
- 5. \_\_\_\_\_
- 6. \_\_\_\_\_
- 7. \_\_\_\_\_
- 8. \_\_\_\_\_



Determine which letter BEST represents the shapes that were used to create the figure shown.

**Answers**

1)



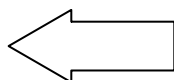
- A. heptagon & hexagon
- B. triangle & hexagon
- C. triangle & triangle
- D. rectangle & heptagon

2)



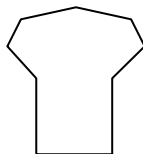
- A. heptagon & triangle
- B. quadrilateral & triangle
- C. square & hexagon
- D. heptagon & pentagon

3)



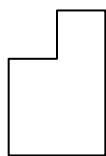
- A. square & heptagon
- B. triangle & rectangle
- C. hexagon & square
- D. quadrilateral & octagon

4)



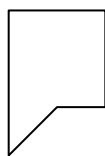
- A. heptagon & pentagon
- B. triangle & hexagon
- C. rectangle & octagon
- D. rectangle & heptagon

5)



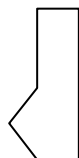
- A. square & triangle
- B. octagon & hexagon
- C. square & square
- D. triangle & quadrilateral

6)



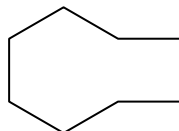
- A. square & triangle
- B. octagon & rectangle
- C. octagon & hexagon
- D. heptagon & triangle

7)



- A. pentagon & rectangle
- B. octagon & heptagon
- C. pentagon & quadrilateral
- D. rectangle & triangle

8)



- A. triangle & hexagon
- B. square & octagon
- C. rectangle & quadrilateral
- D. quadrilateral & hexagon

1. **C**

2. **B**

3. **B**

4. **D**

5. **C**

6. **A**

7. **D**

8. **D**